




Let's Play Store!

with Ana and Harwin

What would you label each group of items? Count them, and color!



More Let's Play Store!

Ana has some questions.
You can help her out using
the picture on the first page!

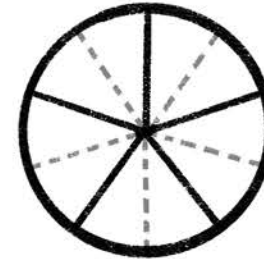
What fraction of the meats are fish?

Number of fish → $\frac{\square}{\square} \div 2 = \frac{\square}{\square}$

Number of all meats → $\frac{\square}{\square} \div 2 = \frac{\square}{\square}$

Simplify!

Show it
on a pie chart
by coloring
the number of
slices:




BONUS:
What is the
percentage?

What fraction of the breads are French loaves? 

Number of French loaves → $\frac{\square}{\square} \div 3 = \frac{\square}{\square}$

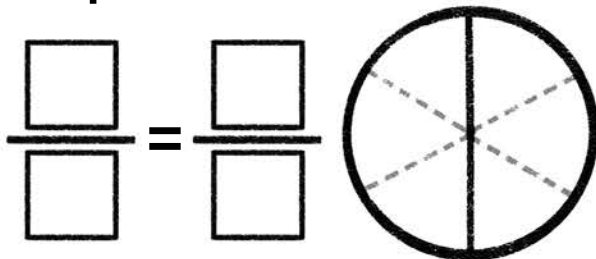
Number of all breads → $\frac{\square}{\square} \div 3 = \frac{\square}{\square}$

Show it
on a pie chart
by coloring
the number of
slices:

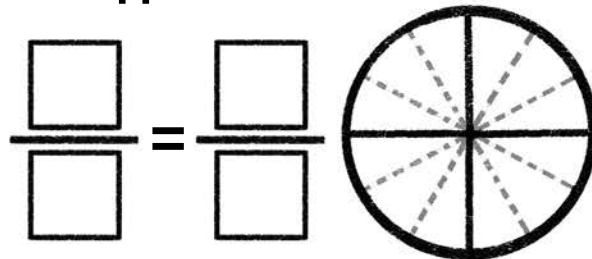


BONUS:
What is the
percentage?

**What fraction of the desserts
are pie slices?**



**What fraction of the fruits
are apples?**



**What fraction of the vegetables
are broccoli?**

